



INDIAN SCHOOL AL WADI AL KABIR
DEPARTMENT OF MATHEMATICS (2025 – 2026)


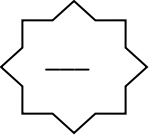

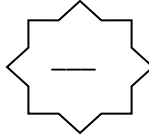

TOPIC: NUMBER CONCEPTS (51-70)


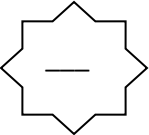
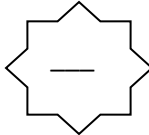

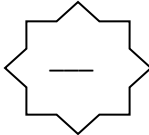
WORKSHEET - 3

RESOURCE PERSON: Mrs. Anuradha Sharma

NAME: _____ CLASS: I SEC: _____ DATE: _____

Q1. Write the missing numbers in each row.

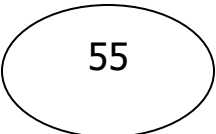
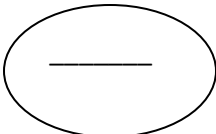
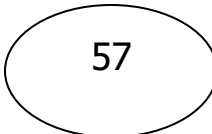
a.  63  —  65  —  67

b.  51  —  —  54  —

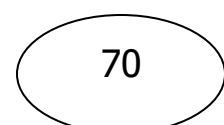
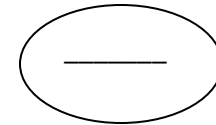
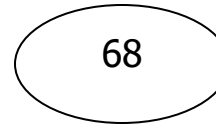
Q2. Write the numbers that come before and after the given numerals.

	Before			After
a.	_____	52	65	_____
b.	_____	67	59	_____
c.	_____	62	68	_____

Q3. Write the numbers that comes between.

a.  55  —  57


b.





Q4. A. Colour the greatest numerals in red and the smallest numerals in blue in each set.


a.	60	58	52	59
b.	53	68	61	67
c.	62	66	70	55


B. Compare the numbers and put the correct symbol/sign $>$, $<$, or $=$.


a. 54  57


e. 66  54


b. 64  63

f. 67  69

c. 65  65

g. 70  70

d. 52  55

h. 69  68

CHECKED BY: ACADEMIC COORDINATOR – CLASS - I
ISWK/DEPARTMENT OF MATHEMATICS /2025-2026